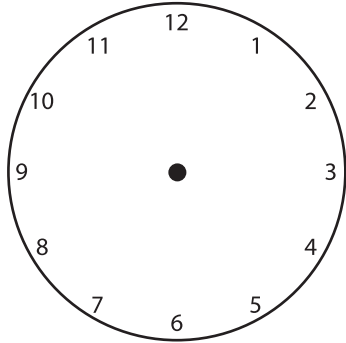


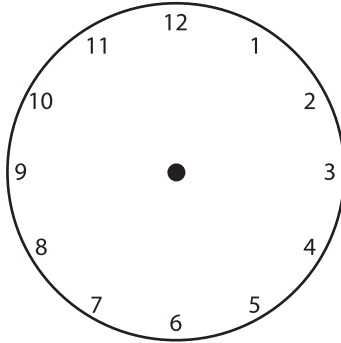
PRACTICE TELLING TIME

Eleanor liked to spend time giving back to her community. Can you help Eleanor tell time and practice your time management skills?

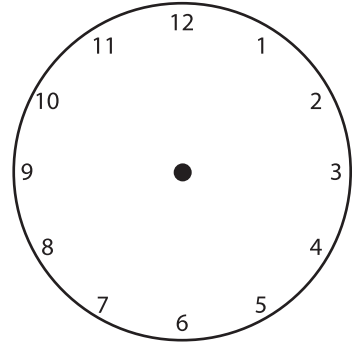
1. Draw the hour and minute hands on the clock above the digital time shown below it.



1:00






6:30



10:20

2. Write the time shown on the clock in the space below each one.




3. Eleanor needs to be to the food pantry by 8:30 AM. It takes her 15 minutes to get to the food pantry. What time does she need to leave her house so that she arrives at 8:30 AM?

4. The grocery store closes at 8:00 PM. Eleanor needs 1 hour to do her grocery shopping. What is the latest Eleanor could arrive at the store in order to complete her shopping?

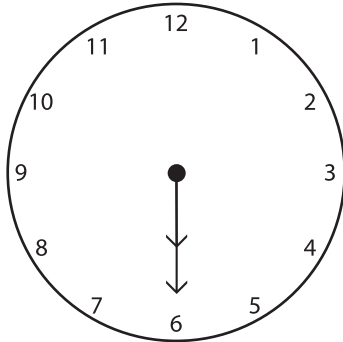
Answer Sheet

Eleanor liked to spend time giving back to her community. Can you help Eleanor tell time and practice your time management skills?


1. Draw the hour and minute hands on the clock above the digital time shown below it.



1:00




6:30




10:20


2. Write the time shown on the clock in the space below each one.



9:35



3:10



12:55

3. Eleanor needs to be to the food pantry by 8:30 AM. It takes her 15 minutes to get to the food pantry. What time does she need to leave her house so that she arrives at 8:30 AM?

8:15 AM

4. The grocery store closes at 8:00 PM. Eleanor needs 1 hour to do her grocery shopping. What is the latest Eleanor could arrive at the store in order to complete her shopping?

7:00 PM